

## SECTION A

1. Name the element of a good map that explains the meaning of map symbols.

.....

.....

2. Mention the major tourist attraction at Nyero Stone Age site.

.....

.....

3. How does the government ensure proper use of revenue in a country?

.....


.....

4. Write any one characteristic of Savanna vegetation.

.....

.....

The diagram below shows **Jomo`s** farm, use it to the questions 5 and 6.



**Key**  
**CCCC-crops**  
**AAAA-animals**

5. Name the system of farming shown in the diagram above.

.....

.....

6. Write any one problem that **Jomo** may face on his farm.

.....

.....

7. Name one river in Africa that ends with an estuary.

.....

.....

8. Why did colonialists introduce cash crop growing in East Africa?

.....

.....

9. Give any one reason why water transport may be difficult on some lakes in Uganda.

.....

.....

10. Write any one way police reduces crimes in an area.

.....

.....

11. Why is crafts making developed in areas with swamps?

.....

.....

12. Name the railway line that connects Zambia to port Dar-es-salaam

.....

.....

13. Apart from using political parties, write one other way people in East Africa demanded for their independence

.....

.....

14. Give any one cause of the great trek.

.....

.....

15. What does the drum stand for on the Uganda national coat of arms?

.....

.....

16. What do Ugandans celebrate every 1<sup>st</sup> may?

.....

.....

17. Which important discovery of early man promoted iron smelting?

.....

.....

18. Name the domestic animal commonly kept for wool production in the velds of South Africa.

.....

.....

19. Why is the government of Uganda encouraging proper management of wastes from industries?

.....

.....

20. How do deciduous trees survive harsh sunny weather?

.....

.....

21. Give any one cause of dense population in industrial areas of Uganda.

.....

.....



22. Which major factor attracted white settlers to Kenya Highlands?

.....  
.....

23. How does rural electrification promote good climate?

.....  
.....

24. Mention any one social service centre in your community.

.....  
.....

25. Write any one way class rules are important in a class.

.....  
.....

26. Which regional grouping unites countries in West Africa?

.....  
.....

27. How is crop farming made possible in dry areas of Africa

.....  
.....

28. Mention the major mineral mined in the Niger Delta.

.....  
.....

29. Write any one way the Berlin conference affected Africa.

.....  
.....

30. State any one way Judiciary promotes peace in Uganda.

.....  
.....



31. What name is given to the physical feature that lies between two hills?

.....  
.....

32. How does the presence of economic activities affect population distribution?

.....  
.....

33. State one way the government of Uganda has promoted literacy in Uganda.

.....  
.....

34. Mention one method of controlling soil erosion in hilly areas.

.....  
.....

35. What is the duty of a polling constable during elections?

.....  
.....

For questions 36–40, answer **either** Christianity **or** Islam but not both on a number.

36. Either: Why is a Christian encouraged to forgive others?

.....  
.....

Or: Why is a Muslim encouraged to forgive others?

.....  
.....

37. Either: Write any one way Jesus Christ showed the Jews that he was the son of God?

.....  
.....

Or: Write any one way prophet Mohammad showed mecca that he was the prophet of Allah?

.....

.....

38. Either: Name any one Christian relief organization in Uganda.

.....

.....

Or: Name any one Islamic relief organization in Uganda.

.....

.....

39. Either: Mention the mountain which is connected to the Ten Commandments in Christianity.

.....

.....

Or: Mention the mountain which is connected to the Quran in Islam.

.....

.....

40. Either: Who was the first apostle to be called by Jesus Christ?

.....

.....

Or: Who was the first covert of Prophet Mohammad?

.....

.....

## Section B

41. a) How are delicate weather instruments kept at a weather station?

.....  
.....

b) How is weather forecasting important to the following people?

i) Travellers.....

ii) Farmers.....

c) Name any one physical feature that can influence the formation of rainfall in an area.

.....  
.....

42. a) What was local trade in the pre-colonial period?

.....  
.....

b) Name the main item of trade from West Africa that was needed in America for production of raw materials.

.....  
.....

c) Write any two factors that can promote trade in a community?

i. ....

ii. ....

43. a) Why is tourism called a service industry?

.....  
.....

b) State any two factors that promote tourism in a country.

i. ....

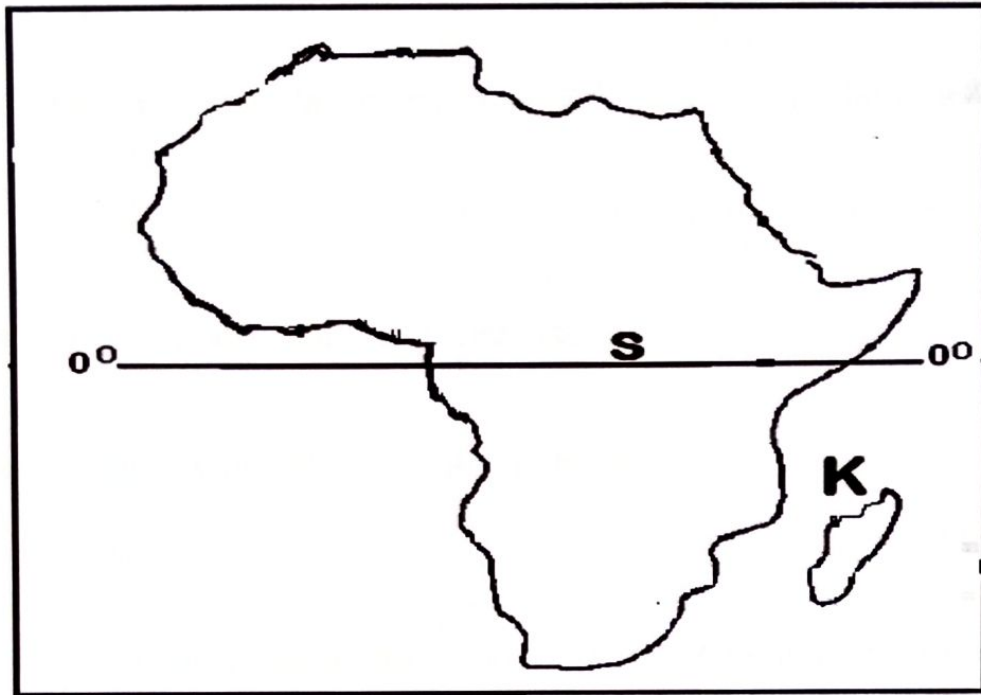
ii. ....



c) Mention any one service provided by the tourism industry to tourists.

.....

44. Study the map of Africa below and use it to answer the questions that follow.



a) Name the country marked **K**.

.....

b) Compare country **K** with Uganda in terms of their location.

.....

.....

c) Using letter **M** show Atlantic Ocean on the map.

.....

d) Which line of latitude is marked **S** on the map?

.....

45. a) Name the political head of a district.

.....

b) Write any two ways districts get their revenue.

i. ....

ii. ....

e) Give any one problem faced by district leaders in getting revenue for the district.

.....

.....

46. a) Name any one prominent Pan Africanist.

.....

b) Write two problems that Pan Africanists faced.

i. ....

ii. ....

c) State any one way world wars encouraged Africans to demand for their independence.

.....

47. a) What title is given to the kings of Bunyoro Kingdom?

.....

b) Give any one reason why Buganda Kingdom became stronger when it started trading with the Arabs at the coast.

.....

.....

c) State any two importance of Kingdoms in Uganda Today.

i. ....

ii. ....

48. a) State any one way the following facilities are useful to a school;
- i) school play ground.....
  - ii) school library.....
- b) Give any two ways the school can be important to the community.
- i) .....
  - ii) .....
49. a) State any one way farmers benefit from Agro based industries.
- .....
- b) Name the crops from which the following products are processed;
- i) Perfumes.....
  - ii) Cosmetics.....
- c) Write any one problem facing crop farmers in East Africa?
- .....
50. a) Give any two reasons why dams are created on some rivers.
- i).....
  - ii) .....
- b) Mention the human activities that can be done in the following stages of a river.
- i) Middle stage.....
  - ii) Lower stage.....



For questions **51-55**, answer either the Christian or Islam questions but not both on a number:

51. Either: Give one reason why a God fearing child needs to pray in the following situations

a) Before going to school

.....

b) Before sleeping

.....

c) Before sitting an examination

.....

d) Before early food

.....

Or: Give one reason why a God fearing child needs to pray in the following situations

a) Before going to school

.....

b) Before sleeping

.....

c) Before sitting an examination

.....

d) Before early food

.....

52. Either: a) What is marriage according to Christianity?

.....

b) Give two reasons why people marry today.

i) .....

ii) .....

c) Mention any one factor considered when choosing a marriage partner.

.....

Or: a) What is marriage according to Islam?

.....

b) Give two reasons why people marry today.

i) .....

ii) .....

c) Mention any one factor considered when choosing a marriage partner.

.....

53. Either: a) Why did God call Moses?

.....

b) What was the work of Moses before he was called by God?

.....

c) Give any two ways Moses showed his faith in God.

i) .....

ii) .....

Or: a) Why did Allah call Prophet Musa?

.....

b) What was the work of prophet Musa before he was called by Allah?

.....

c) Give any two ways prophet Musa showed his faith in Allah.

i) .....

ii) .....

54. Either: a) Give any two ways in which Christians worship God.

i) .....

ii) .....

b) State any two benefits of worshipping God.

i) .....

ii) .....

Or: a) Give any two ways Moslems worship Allah.

i) .....

ii) .....

b) State any two benefits of worshipping Allah.

i) .....

ii) .....

55. Either: a) Write any two ways a Christian parent can help the children to develop strong faith in God.

i) .....

ii) .....

b) State any two benefits of strong faith to a Christian child.

i) .....

ii) .....

Or: a) Write any two ways a Muslim parent can help the children to develop strong faith in Allah.

i) .....

ii) .....

b) State any two benefit of strong faith to a Muslim child.

i) .....

ii) .....

**END**



## A

1. Name one form of energy that results from friction.  
.....  
.....
2. Mention one enzyme that acts on food in the mouth.  
.....  
.....
3. Renewable resources are components of the environment that can be replaced by natural process when used, how are plants and animals replaced in the environment?  
.....  
.....
4. How are gills adapted to their function in fish?  
.....  
.....
5. Why would one prefer using a metallic mug to a plastic one when taking tea?  
.....  
.....
6. State one advantage of natural incubation over artificial incubation.  
.....  
.....
7. State the importance of fleshy leaves in an onion.  
.....  
.....
8. What happens to the density of an object when its volume reduces?  
.....  
.....

9. Why are people discouraged from keeping domestic animals inside the house at night?
- .....

.....
10. Name the water borne-disease that is characterized by blood stained diarrhoea in man.
- .....

.....
11. Give one example of an involuntary action in the body.
- .....

.....
12. Identify the property of magnetism enables a sailor to locate places.
- .....

.....
13. In the space below draw the eggs of a frog.
- .....

.....
14. How do algae reproduce?
- .....

.....
15. Why is wood covered with soil in process of producing charcoal?
- .....

.....
16. What happens on the surface of the bottle removed from a fridge and left in an open place?
- .....

.....

The diagram below shows a kind of root system. Use it to answer questions 17 and 18.



17. What kind of germination results into the above kind root system?  
.....  
.....
18. Mention one example of a plant with the above kind of root system.  
.....  
.....
19. Give one disadvantage of using a wet cell as a source of electricity.  
.....  
.....
20. Why are we discouraged from using cold water when administering first aid to a person with fever?  
.....  
.....
21. Why are we encourage to eat foods rich in vitamin A?  
.....  
.....
22. How are plants different from fungi in terms of feeding?  
.....  
.....



23. Name the class of birds with such a beak shown below.



24. How can the government protect endangered species of animals?

.....

.....

25. Why is claysoil considered the best for pottery?

.....

.....

26. Mention the main product obtained from Dorset sheep.

.....

.....

27. Give one cause of deformity of bones in human beings.

.....

.....

28. Mention one factor that can lead to seed dormancy.

.....

.....

29. How are aeroplanes protected from effects of friction in air?

.....

.....

30. Name the organ that enables cetaceans to maintain constant body temperature.

.....

.....

31. State one similarity between an echidna and a duck.

.....

.....

32. How are red blood cells important in respiration?

.....

.....

33. Arrange the following processes according to their order of occurrence.  
Ovulation, copulation, implantation, fertilization.

.....

.....

34. Besides the shape, give any other structural difference between a red blood cell and a white blood cell.

.....

.....

35. Which body organ enables us to detect changes in temperature?

.....

.....

36. How do trees help to conserve air?

.....

.....

37. Which component of soil is formed by decomposition of organic matter?

.....

.....

38. Why is it not advisable to cover the hole of a ventilated improved pit latrine?

.....

.....

39. Which gas is necessary for seed germination?

.....

.....

40. State the importance of ear tag applicator on a cattle farm.

.....  
.....

### SECTION B

41. a) Give one importance of saliva in the process of digestion.

.....  
.....


b) Where in the digestive system does absorption of mineral salts occur?

.....  
.....

c) Why does salivary amylase become inactive in the stomach?

.....  
.....

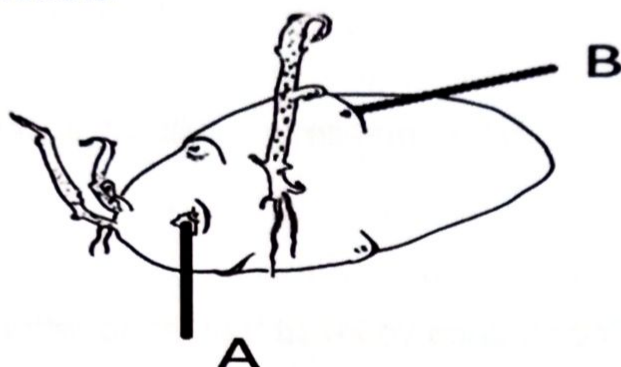
d) Identify the process illustrated below.



.....



42. The diagram below shows an underground stem. Use it to answer questions that follow.



- a) Name food value obtained from the above stem.

.....  
 .....

- b) To which group of underground stems does the above belong?

.....  
 .....

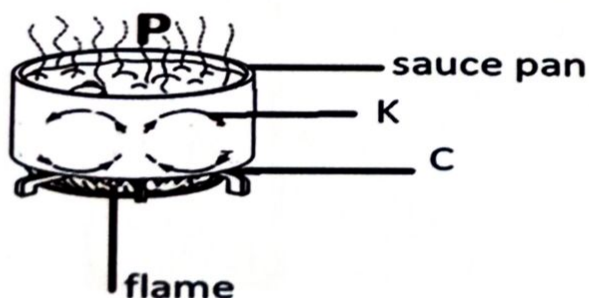
- c) How is part A useful?

.....  
 .....

- d) Give one way of caring for the above plant.

.....  
 .....

43. Below is an experiment carried out by primary five pupils about boiling water.



a) Which method of heat transfer takes place at K?

.....  
.....

b) Mention the physical process represented by P.

.....  
.....

c) In which state matter does heat travel by conduction?

.....  
.....

d) What type of energy is possessed by boiling water?

.....  
.....

**44.** a) How is a predator different from a scavenger?

.....  
.....

b) Give one example of each of the following.

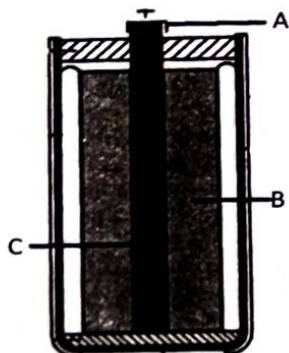
(i) Scavenger mammal.....

(ii) Scavenger bird.....

c) What is meant by the term "prey" in terms of feeding?

.....  
.....

**45. Study the electric cell below and answer questions that follow.**



a) Name part labeled B

.....  
.....

b) Why is a dry cell regarded as a primary cell?

.....  
.....

(c) What form of energy is stored in a dry cell?

.....  
.....

**46. a) What is family planning?**

.....  
.....

b) Mention two permanent methods of a family planning.

i).....

ii).....

c) Identify one basic requirements of a pregnant.

.....  
.....

**47. (a)What term is used to refer to the destruction of vegetation?**

.....  
.....

(b)Mention two ways how vegetation destroyed.

i).....

ii).....

(c)State the dangerous effect of destroying vegetation.

.....  
.....



**48. a)** Apart from sweating, give any other way the skin regulates body temperature.

.....  
.....

**b)** Mention one excretory product removed from the body by skin.

.....  
.....

**c)** How are sweat glands important in the human body?

.....  
.....

**d)** Why does one urinate frequently on a cold weather day?

.....  
.....

**49. (a)** Name the fuel obtained by fermenting animal excreta.

.....  
.....

**(b)** Identify the bacteria involved in the production of the above fuel.

.....  
.....

**(c)** How is the use of the above fuel environmentally friendly?

.....  
.....

**(d)** What name is given to the materials used to produce the above fuel?

.....  
.....

**50. Mention one example of each of the following crops.**

a) stem tuber

.....

b) root tuber

.....

c) vegetable fruit

.....

d) leafy vegetable

.....

**51. Below is a list of human activities carried out by man in the environment.**

- Mining
- Mono-cropping
- Release of smoke from factories
- Planting trees.
- Draining swamps
- Treating industrial gases

(a) Which activity is likely to cause soil infertility?

.....

.....

(b) Identify the activity from the above list that causes global warming

.....

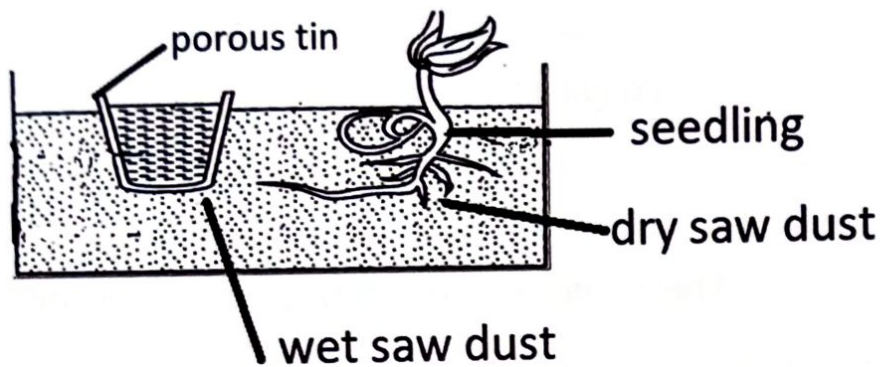
.....

(c) From the above list, identify two conservation practices.

(i).....

(ii).....

52. Below is an illustration of a plant response to stimulus



a) Identify the plant response shown above.

.....

.....

b) How is the above response important to plants?

.....

.....

c) Identify the stimulus in the above diagram.

.....

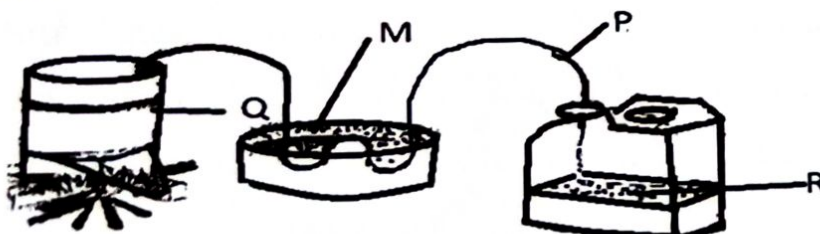
.....

d) Besides the above, name any other plant response to stimulus.

.....

.....

53. The diagram below shows one of the methods of cleaning water. Study it and answer questions 53.





a) Name the method of cleaning water shown above.

.....  
.....

b) Identify the physical process taking place at M.

.....  
.....

c) Why is the part of P that is in water coiled?

.....  
.....

c) Why is liquid R not recommended for drinking?

.....  
.....

**54. Match the disease in List A to their signs and symptoms in list B**

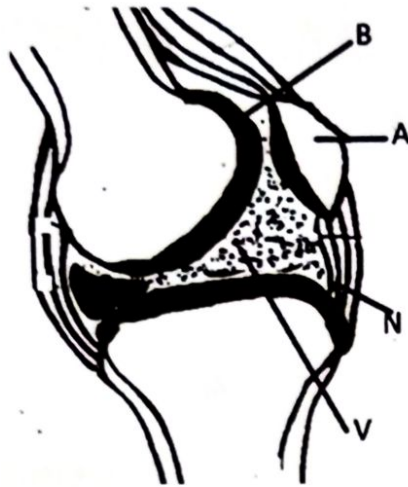
**List A**

**List B**

- |                                 |                                          |
|---------------------------------|------------------------------------------|
| (i) Foot and mouth disease      | blood stained dung                       |
| (ii) Brucellosis                | blisters on hooves and muzzle            |
| (iii) Anthrax                   | placenta remains in the womb after birth |
| (iv) Red water                  | Reddish urine due to liver damage        |
| Swelling of the udder and teats |                                          |

- i) Foot and mouth disease .....
- (ii) Brucellosis .....
- (iii) Anthrax .....
- (iv) RedWater .....

55. The diagram below shows a movable joint. Use it answer to answer questions



- (a) give the function of parts labeled N and v
- (i) N.....
- (ii) V.....
- (b) How is the fluid labeled B useful in a joint?
- .....
- .....
- (c) Mention one disease that affects muscles and bones.
- .....
- .....

Ends

**SECTION A: 50 MARKS**  
**Questions 1 to 50 carry one mark each**  
**Sub-section I**

*In questions 1 to 10, use the correct form of the words in the brackets to complete each sentence.*

1. Orlando took ..... examination paper to the invigilator. (he)
2. A snail moves ..... than a snake. (slowly)
3. Some candidates were.....due to malpractice. (disqualify)
4. All the guests put on their.....wear on my aunt's introduction party. (culture)
5. Environmental.....has become a great concern nowadays. (degrade)
6. If the mechanic .....here, he would have repaired my new bicycle. (to be)
7. How many .....does an official letter have? (address)
8. The ..... with whom we went to Dubai have just been arrested. (Germany)
9. Of the three cakes, I need the.....(tasty)
10. The carpenter has been .....the planks since mid-day. (to smooth)

For questions 11 to 15, fill the gaps with a suitable word or group of words.

11. Do you know the.....the baker used to bake the cake?
12. The health officials will have .....one-hour meeting on Friday.
13. The .....from whom we bought this beef has been murdered.
14. Neither the receptionist .....the secretary will issues out the application forms.
15. The sun rises in the.....and sets in the West.



For questions **16** and **17**, use each of the given words in a sentence to show that you know the difference in the varnish.

16. fare

.....  
.....

17. fair

.....  
.....

For questions **18** to **19**, write the given short forms in full.

18. DVD .....

19. shan't.....

For questions **20** to **21**, rearrange the given words in alphabetical order.

20. dairy, day, diary, date

.....  
.....

21. cast, phone, vision, gram

.....  
.....

In questions **22** to **24** rewrite the sentence giving one word for the underlined group of words.

22. Children who don't obey their teachers find challenges in life.

.....  
.....

23. A lot of people from Poland live in South Africa.

.....  
.....

24. The people who attended the burial ceremony wailed a lot during the sermon.

.....  
.....

*In questions 25 and 26, give the plural form of the following*

25. His ox. ....

26. city .....

*In questions 27 and 28, rewrite giving the opposite of the underlined words.*

27. Most schools in Uganda are privately owned.

.....  
.....

28. Sheila disconnected the extension cables.

.....  
.....

For questions 29 and 30, rearrange them to make a correct sentence.

29. debating how important is!

.....  
.....

30. peace what Kenya was needed

.....  
.....

## Sub-Section II

*For each of questions 31 to 50, re-write as instructed in brackets.*

31. Ranzo is a herdsman. He is also a baker.

(Join as one sentence beginning. Besides.....)

.....  
.....

32. Babirye has a lot of pride in her children.

(Re-write the sentence using: .....proud.....)

.....  
.....

33. It was not necessary for the veterinarian to treat the skinny cow.

(Re-write the sentence using: .....needn't .....)

.....  
.....

34. Mr. Musumba borrowed a pair of stockings from Noel.

(Re-write the sentence beginning: Noel.....)

.....  
.....

35. Enock's brother is very hardworking. All teachers like him.

(Re-write as one sentence using: .....such.....that.....)

.....  
.....

36. Every boy in P.7 plays football. (Re-write the sentence beginning: All.....)

.....  
.....

37. A cow and a goat are domestic animals

(Re-write the sentence using: .....as well as.....)

.....  
.....



38. Mustafi weighs 40kgs. His brother also weighs 40kg.  
(Re-write the sentence using: .....as.....as.....)

.....  
.....

39. A DVD player is not difficult to operate. A television set is not difficult to operate.  
(Join as one sentence using: .....and neither.....)

.....  
.....

40. People in west Nile grow a lot of tobacco.  
(Re-write the sentence beginning: A lot of tobacco.....)

.....  
.....

41. I am twelve years old. (Write a suitable question to the response)

.....  
.....

42. The inspector will go for the meeting only if he gets a vehicle.  
(Re-write the sentence beginning: If.....)

.....  
.....

43. Mr Mawazo's wedding is the best wedding I have ever attended.  
(Re-write the sentence using: .....never.....)

.....  
.....

44. She has bought a very good CD player.  
(Re-write the sentence beginning: They.....)

.....  
.....

45. Here is the gentleman. You left your calves with him.  
(Re-write the sentence using: .....whom.....)

.....  
.....

46. The school nurse came quickly after the pupil had got an accident.  
(Re-write the sentence using .....before.....)

.....  
.....

47. We can't wait to write PLE.  
(Re-write the sentence using: .....look forward.....)

.....  
.....

48. Mary said that she would not attend the burial of Mr. Mwaze that Tuesday.  
(Re-write the sentence using: ".....,"said Mary.)

.....  
.....

49. Much as he is a good journalist, he does not cover a lot of news items.  
(Re-write the sentence: Although.....)

.....  
.....

50. We shall have holidays in November.  
(Re-write the sentence beginning: By December.....)

.....  
.....



## SECTION B (50MARKS)

Questions 51 to 55 carry 10 marks each

51. Read the passage below and answer the questions that follow in full sentences.

### DOMESTIC VIOLENCE

The night was as silent as a deserted cemetery expect for the buzzing of mosquitoes, croaking of frogs and hooting of owls from a distance probably spelling out evil spirits at night. No sooner had we slept than we heard the search of breaks. This was certainly my father who usually came at night completely drunk. I came out of my bed leaving my blanket swirling in a chaotic manner. I tiptoed slowly towards the window, my father was staggering awkwardly singing in a deep voice, "**Bakuzala Mubala**" which was his **favourite** song that meant born in the bar."

Suddenly, a loud bang was heard. My father had certainly kicked the door and it was broken into uncountable pieces. My mother completely **started** dashing towards the door, her heart throbbing with mighty beats. "You stupid woman, how long do you take to open the door?" my father inquired of mother menacingly. "Is this kind of life you expect me to lead after making me discontinue with my education?" my mother asked as tears rolled don her rosy cheeks.

Nonsense! You are good for nothing. There is nothing you are telling me. Just bring food. My mother being sober obeyed and without dilly-dallying, lay the table with posho and vegetables. "Is this what you give me?" Am I a beggar to eat such food? Give me food, my father roared making us more frightened. From his sitting position, he came with fury, took the plate of vegetables and threw it on my mother's face. " "Today, I will teach you a lesson," my mother said , her heart mounting courage. Before my father could cut once more, my mother took the plate of posho and hit him on his wide nostrils making him fall with a thud on the floor.

That was the the time hell broke loose. My mother began beating my father and also went on to defend himself, since he was drunk, I thought he could not defeat my mother but however hard she tried she could not manage. " Beat him! Teach him manners!" my little brother shouted running towards the kitchen. I was **astonished** to see him back with a mingling stick. My young brother James, my father's apple of the eye began beating up my father on his bottoms. There was nothing I could do but rather watch the drama which was unfolding pangs of sadness surged through my body.

a) What is the story about?

.....

.....

b) According to the passage, what was buzzing?

.....

.....



c) Who do you think kicked the door?

.....

.....

d) What kind of food was served to the writer's father?

.....

.....

e) What did the mother use to hit the father's wide-open nostrils?

.....

.....

f) What is the name of the writer's young brother?

.....

.....

g) What did the little brother bring from the kitchen?

.....

.....

h) How did the mother teach the father a lesson?

.....

.....

i) Give a word or group of words with the same meaning as the following as used in the passage;

i. started.....

ii. astonished.....

53. The announcement below appeared in the Daily Monitor newspaper of 21st May 2021. Study it carefully to answer the questions that follow.

**DEATH ANNOUNCEMENT**

The family of the late Abdul Sulaiman of Nansana Municipality with deep sorrow announces the untimely death of their father Abdul Sulaiman succumbed to COVID19 yesterday at Kibuli Hospital. A vigil will be held at their home in Nansana, Wakiso District today 21/05/2021. There will be prayers at his home starting at midday the following day.

Thereafter, the mourners will proceed to Masanafu for burial of the deceased at his ancestral home.

Informed are relatives and friends. May his soul rest in peace.

**Abdul Muhammed**

a) What kind of announcement is the above?

.....

b) According to the announcement, who died?

.....

c) What did the deceased die of?

.....

d) Where did this announcement appear?

.....

.....

e) When did he die?

.....

f) Where will the prayers for the deceased be held?

.....

.....

g) Who wrote the announcement?

.....

h) According to the announcement, where is the ancestral home of the above family?

.....

.....

**52. Read this poem and in full sentences answer the questions that follow**

It is a restaurant  
At Nyama Choma  
Enter and be welcomed  
Sit with hope and comfort  
Pick a menu and make choices  
Order for something  
Cash at hand for all here

It is a restaurant  
**Second to none** in town  
Sweet aroma here and there  
Raising your appetite  
**Mouth-watering** dishes with smiles  
Attractive waitresses hang around  
Music accompanies the customers  
As they enjoy their meals.

It is a restaurant  
Where a **customer** is a king or queen  
Enter and you're welcomed by dining tables  
Filled with flowers and menus  
Tables laid with cutlery  
Cutlery arranged in order  
The choice is yours.

It is a restaurant  
With different kinds of meals  
Each served at the right time  
**Accompanied** with appropriate salads  
Enjoying with cash at hand.



a. What is the poem about?

.....  
.....

b. Which restaurant is being talked about?

.....  
.....

c. According to the second stanza, where is the sweet aroma?

.....  
.....

d. What raises the appetite of customers?

.....  
.....

e. Which kind of people help customers in this restaurant?

.....  
.....

f. What does this restaurant call a customer?

.....  
.....

g. Where are the flowers put?

.....  
.....

h. How is cutlery arranged?

.....  
.....

i. Give a word to mean the same as these underlined words in the poem

i) customer.....

ii) mouth-watering.....

j) Give a word or group of words to mean the same as the following as used in the information.

i) untimely.....

ii) deceased.....

54. Study the bankslip below and answer the questions that follow in full sentences.

**PARENT'S COPY**  
CENTENARY BANK, MUKONO BRANCH  
**Hilton Junior School, P.O Box 539**  
**Mukono**  
A/C: 16459034563  
Tel: 0392 443 443  
email: [Hiltonjs@gmail.com](mailto:Hiltonjs@gmail.com)  
Date: 23<sup>rd</sup> September, 2022  
Pupil's Name: Kaseegu Morgan  
Class: P.5                      Term: 3

Notes	Amount (shs)
50,000	300,000
20,000	160,000
10,000	50,000
5,000	
2,000	
1,000	5,000
Coins	
500	
200	
100	
50	
Bank charges	2,500
<b>Total</b>	<b>512,500</b>

**Amount in words:** Five hundred twelve thousand five hundred shillings only.  
Paid by: **Mawanda Harriet (mother)**

### Questions

a. In which bank was the money paid?

.....  
.....

b. When was the school fees deposited?

.....  
.....

c. In which school does Morgan study?

.....  
.....

d. How many notes of fifty thousand shillings were deposited?

.....  
.....

e. Write the school account number

.....  
.....

f. For which term was the school fees paid?

.....  
.....

g. What is the relationship between Harriet and Morgan?

.....  
.....

h. In which district is this school found?

.....  
.....


i. Write the following in full

a/c.....

P.O.....



55. The pictures A-F tell a complete story. Study them carefully and write a sentence about each picture describing what is happening.



a) Picture A

.....

b) Picture B

.....

c) Picture C

.....

d) Picture D

.....

e) Picture E

.....

f) Picture F

.....

g) Where were the children going in picture A?

.....

.....

h) What is the man in picture B wearing on his head?

.....

.....

i) In which class are these pupils?

.....

.....

j) By what means did these pupils go to school?

.....

.....

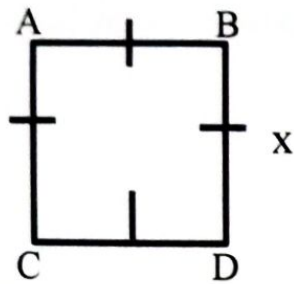
**END**

## **SECTION A**

1. Work out:  $45 + 7$
  
  
  
  
  
  
  
  
  
  
2. Write in figures: Nine hundred nine thousand forty
  
  
  
  
  
  
  
  
  
  
3. Simplify:  $9d - (3d - 6)$
  
  
  
  
  
  
  
  
  
  
4. Draw a Venn diagram to show that  $n(\text{PUQ}) = n(\text{T})$
  
  
  
  
  
  
  
  
  
  
5. Work out:  $-5 - -8$



6. Find half of the side  $x$  of the figure ABCD of area  $64\text{cm}^2$ .



7. Decrease 1000kg in the ratio of 3:5

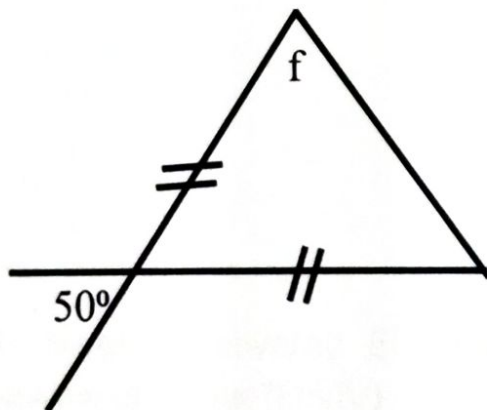
8. A meeting started at 9:50a.m and ended at 10:15 a.m. How long was the meeting?

9. Calculate the circumference of a semi-circle whose diameter is 21dm.

10. The cost of a book is five times as much as a pen. If they both cost Sh.60,000 what is the cost of the book?

11. In a meeting of 54 teachers,  $\frac{4}{9}$  of them are male. What is the probability of a female becoming a secretary of the meeting?

12. Find the size of the angle marked  $f$  in the diagram below.



13. Write 449 in Roman Numerals

14. Peter got a loan of sh.500,000 at a rate of 5% per year in a period of 6 months. Find the interest.

15. Find the range of the following numbers.  
5, +2, -1, 0, -2

16. Mugisha covered 500 metres in 50 seconds. Find his speed in kilometre per hour (km/hr)



17. Using a ruler, a pencil and a pair of compasses only, construct an angle of  $135^\circ$  in the space below.

18. Given that:  $y^2 + y^2 = 98_{\text{ten}}$ , find the value of  $y$ .

19. A school has enough food to last 200 pupils for 3 days. How long will the food last if 100 more pupils join the school?

20. What is the 100<sup>th</sup> triangular number?

**SECTION B: 60 MARKS**

21. Mellisa bought the items in the table below from Kawempe market.

Item	Quantity	Unit cost	Amount
Maize flour	2kg	Sh.3500 @ kg	Sh. _____
Beans	$3\frac{1}{2}$ kg	Sh. _____	Sh.10,500
Soap	_____ bars	Sh.4000	Sh. _____
Meat	1500gm	Sh.8000 @ kg	Sh. _____
Total cost			Sh.41,500

(a) Complete the table.

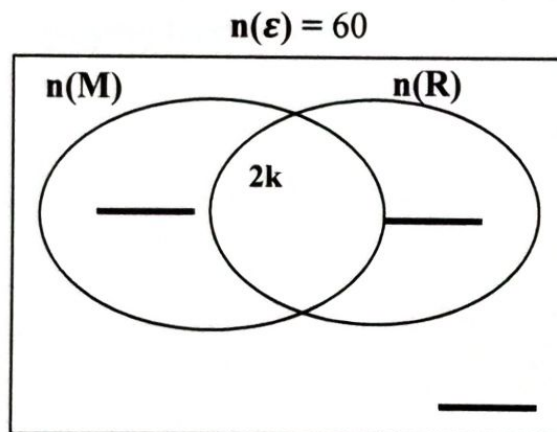
(5marks)

(b) How much money did Mellisa pay if she was given a discount of 20%?  
(1 mark)

22. In Kira Primary school, the ratio of boys to girls is 3:7. If there are 72 more girls than boys, find the total enrolment of the pupils in the school.  
(4marks)

23. In a class of 60 pupils, 35 like Rice (R) 30 like Matooke (M),  $2k$  like both meat and beans while 6 pupils like neither of the two.

- a) Represent the above information on the Venn diagram below.  
(3marks)



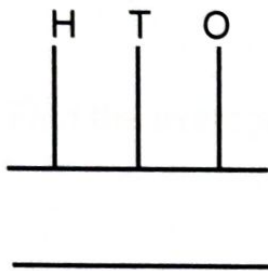
- b) Find the value of  $k$ .  
(2 marks)



24. a) Solve for  $y$ :  $301_y = 76_{\text{ten}}$

(3marks)

b). Show  $2202_{\text{five}}$  on the abacus below  
(2marks)



25. In a class, there are 640 pupils,  $\frac{5}{8}$  of the pupils are girls and the rest are boys. If  $\frac{1}{4}$  of the boys and  $\frac{3}{5}$  of the girls like playing football, how many pupils do not like playing football? (4 marks)

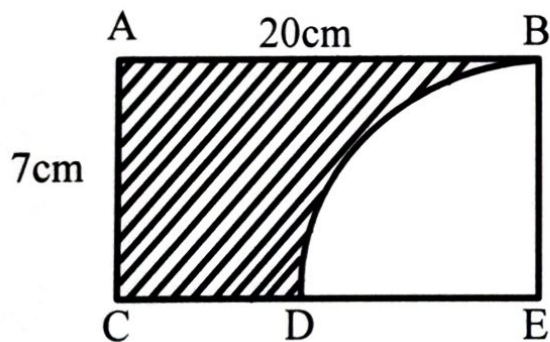
26. Below is a table of marks scored by pupils in a certain test. Use it to answer the questions that follow.

Marks	90	50	40	60
No of pupils	2	4	1	3

a) How many pupils scored above 55? (2marks)

(b) Find the average mark. (3 marks)

27. Below is figure ABCE. Study it and answer the questions that follow.



a) Calculate the distance around figure BDE. (2 marks)

b) Calculate the area of the shaded part.

(3marks)

28. Simplify:  $\frac{0.24 \times 0.12}{0.06 \times 2.4}$

(3 marks)

b) Change 0.181818... to a common fraction.

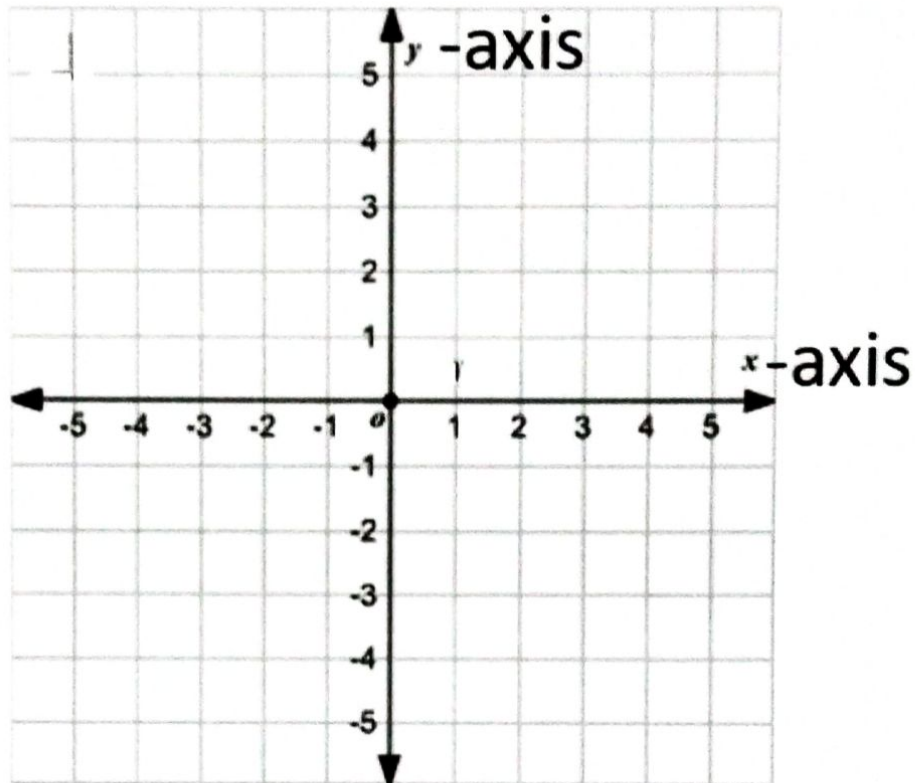
(2 marks)



30. a) Plot the following points on the co-ordinate graph below.

K (-4,3) L (-1,3) M (-4,-1) and N (3,-1)

( 4 marks)



b) Join K to L, L to N, N to M, M to K

(1mark)

c) Name the figure formed.

(1mark)

29. Three girls; Maria, Glory and Alma shared 210 pencils. Maria got twice as much as Glory and Alma got 30 pencils more than Abby. How many pencils did each girl get? (5 marks)

31. A motorist drove at 60km/hr for 3 hours from A to town B. He continued to town C at 80km/hr for 2 hours.

a) Find the total distance covered from A to C. (3 marks)

b) Calculate the average speed for the whole journey. (2 marks)

32. a) Solve:  $2p + 4 = 2 \pmod{6}$ .

3marks.

b) If today was a Wednesday, what day of the week would it be after 31 days?

(2 marks)

**END**